

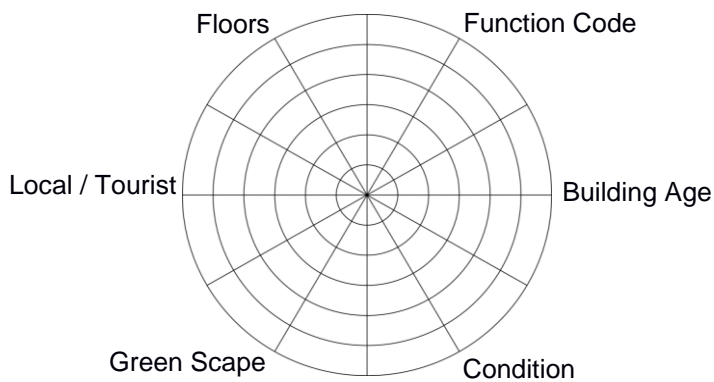
# Changing Places Follow-up

## Placecheck Summary

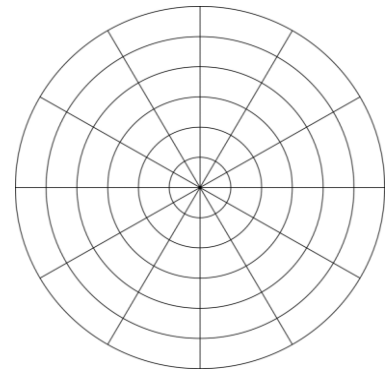
	Main Positives - Placecheck	Main Problems - Placecheck
<b>Brodick</b>		
<b>Lamlash</b>		
<b>Blackwaterfoot</b>		
<b>Lochranza</b>		

## Mode Building Survey, Circular Bar Plot (1-5 Scale)

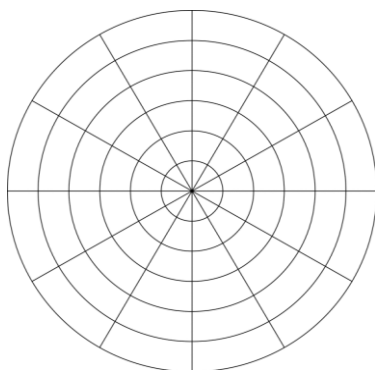
**BRODICK**



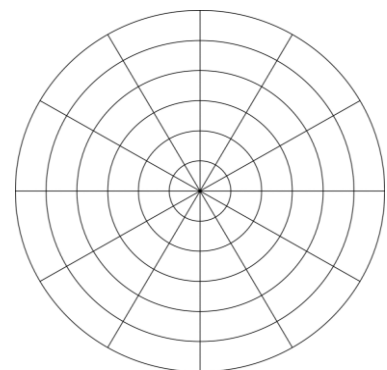
**LAMLASH**




**BLACKWATERFOOT**



**LOCHRANZA**



## Bipolar Semantic Index



## Landscape Evaluation Totals

	BRODICK	LAMLASH	BLACKWATERFOOT	LOCHRANZA
TOTAL				
RANK (1-4)				

## Landscape Character Descriptions

*Write a sentence or short paragraph to describe each location, using as many of the circled words from your Landscape Character Evaluation field sheet as possible.*

**BRODICK:**

**LAMLASH:**

**BLACKWATERFOOT:**

**LOCHRANZA:**

## Census Information

For the 2001 Census Information Table, list an economic, demographic and social figure for Brodick and Lochranza. Explain the differences in the villages' figures for each factor, and discuss the impact this may have on each village.

	Brodick	Lochranza	Explanation
<b>Economic</b>			
<b>Demographic</b>			
<b>Social</b>			

## Population Pyramids

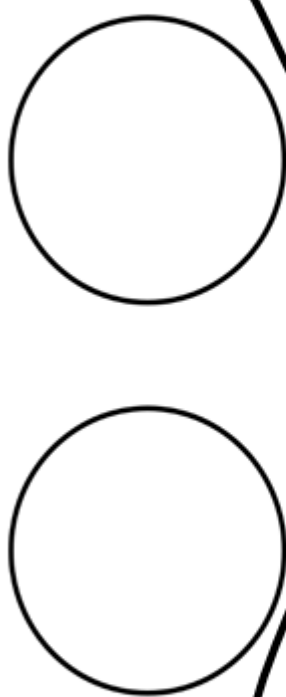
Look at the two population pyramids for Lochranza, 1841 and 2001. Explain the changes that have taken place with a) Young People (0-24) b) Middle Aged People (30-50) c) Older people 50+.

	CHANGES
<b>Young (0-24)</b>	
<b>Middle Aged (24-50)</b>	
<b>Older (50+)</b>	

# Pedestrian & Traffic Survey

## Divided Car Barchart

The entire bar = 100%; calculate an appropriate scale, and use car number plate data to divide the bar into Scottish, English, Welsh and Irish, and International vehicles, to indicate where the people parked in each village have come from.




### Lochranza



### Blackwaterfoot



### Brodick



### Lamlash



## Traffic Pie Chart

Using a protractor, complete the pie chart with data from Traffic Counts section of field sheet.

